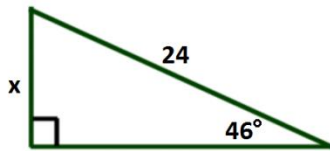
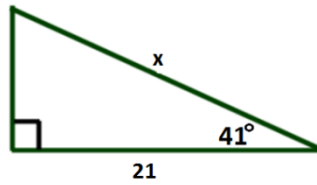


Please find the indicated length on the right triangles below.

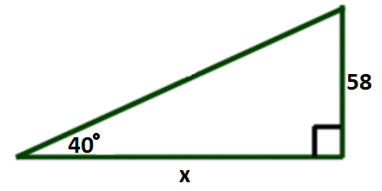
1.



2.

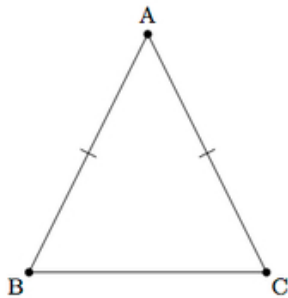


3.

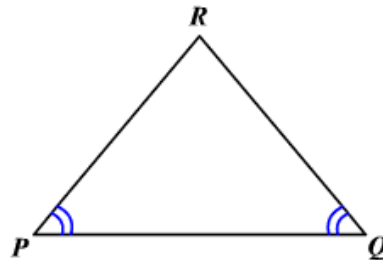


Please find the height of the following triangles.

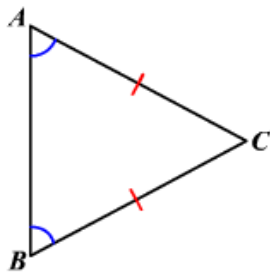
4. Given  $m\angle ABC = 35^\circ$  and  $BC = 10$  inches.



5. Given  $m\angle PRQ = 75^\circ$  and  $PR = 7$  feet.



6. Given  $m\angle ACB = 68^\circ$  and  $AB = 11$  meters.



**Answer Key**

1) 17.3   2) 27.8   3) 69.1   4) 3.5 inches   5) 5.6 feet   6) 8.2 meters